

Solomon Practice Paper

Core Mathematics 3A

Time allowed: 90 minutes

Centre: www.CasperYC.club

Name:

Teacher:


Question	Points	Score
1	4	
2	6	
3	8	
4	10	
5	10	
6	12	
7	12	
8	13	
Total:	75	

How I can achieve better:

-
-
-



Last updated: May 5, 2023



1. Given that

[4]

$$x = \sec^2(y) + \tan(y),$$

show that

$$\frac{dy}{dx} = \frac{\cos^2(y)}{2\tan(y) + 1}.$$

2. The functions f and g are defined by

$$\begin{aligned} f &: x \rightarrow 3x - 4, & x \in \mathbb{R}, \\ g &: x \rightarrow \frac{2}{x+3}, & x \in \mathbb{R}, x \neq -3. \end{aligned}$$

(a) Evaluate $fg(1)$.

[2]

(b) Solve the equation $gf(x) = 6$.

[4]

Total: 6

3. Giving your answers to 2 decimal places, solve the simultaneous equations

[8]

$$\begin{aligned} e^{2y} - x + 2 &= 0 \\ \ln(x + 3) - 2y - 1 &= 0 \end{aligned}$$

4. (a) Use the derivatives of $\sin(x)$ and $\cos(x)$ to prove that

[4]

$$\frac{d}{dx} \tan(x) = \sec^2(x).$$

The tangent to the curve $y = 2x \tan(x)$ at the point where $x = \frac{\pi}{4}$ meets the y -axis at the point P .

(b) Find the y -coordinate of P in the form $k\pi^2$ where k is a rational constant.

[6]

Total: 10

5. (a) Express

[4]

$$3 \cos(x^\circ) + \sin(x^\circ)$$

in the form $R \cos(x - \alpha)^\circ$ where $R > 0$ and $0 < \alpha < 90$.

(b) Using your answer to part (a), or otherwise, solve the equation


[6]

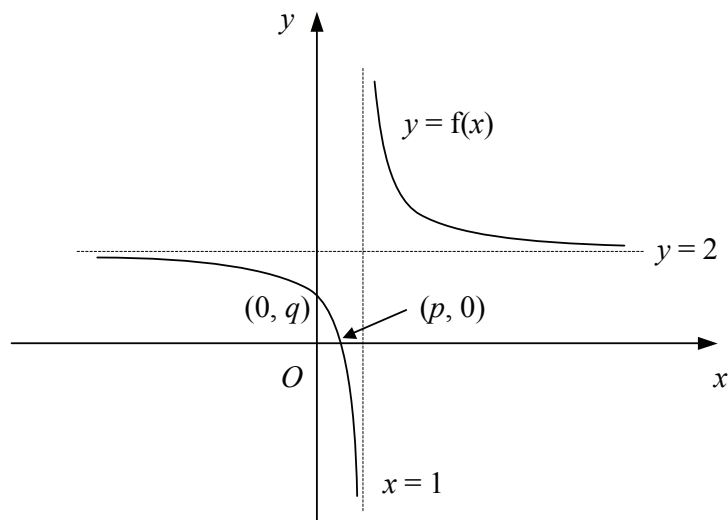
$$6 \cos^2(x^\circ) + \sin(2x^\circ) = 0,$$

for x in the interval $0 \leq x \leq 360$, giving your answers to 1 decimal place where appropriate.

Total: 10

6. Figure shows the curve with equation $y = f(x)$.





The curve crosses the axes at $(p, 0)$ and $(0, q)$ and the lines $x = 1$ and $y = 2$ are asymptotes of the curve.

- (a) Showing the coordinates of any points of intersection with the axes and the equations of any asymptotes, sketch on separate diagrams the graphs of [6]
- $y = |f(x)|$,
 - $y = 2f(x + 1)$.

Given also that

$$f(x) \equiv \frac{2x - 1}{x - 1}, \quad x \in \mathbb{R}, x \neq 1,$$

- (b) find the values of p and q , [3]
- (c) find an expression for $f^{-1}(x)$. [3]

Total: 12

7. (a) i. Show that [6]

$$\sin(x + 30)^\circ + \sin(x - 30)^\circ \equiv a \sin(x^\circ),$$

where a is a constant to be found.

- ii. Hence find the exact value of $\sin(75^\circ) + \sin(15^\circ)$, giving your answer in the form $b\sqrt{6}$.


- (b) Solve, for $0 \leq y \leq 360$, the equation [6]

$$2 \cot^2(y^\circ) + 5 \csc(y^\circ) + \csc^2(y^\circ) = 0.$$

Total: 12

8.

$$f(x) = \frac{x^4 + x^3 - 5x^2 - 9}{x^2 + x - 6}.$$



- (a) Using algebraic division, show that [5]

$$f(x) = x^2 + A + \frac{B}{x + C},$$

where A , B and C are integers to be found.

- (b) By sketching two suitable graphs on the same set of axes, show that the equation $f(x) = 0$ [3]
has exactly one real root.

- (c) Use the iterative formula [5]

$$x_{n+1} = 2 + \frac{1}{x_n^2 + 1},$$

with a suitable starting value to find the root of the equation $f(x) = 0$ correct to 3 significant figures and justify the accuracy of your answer.

Total: 13

