

Solomon Practice Paper

Core Mathematics 2H

Time allowed: 90 minutes

Centre: www.CasperYC.club

Name:

Teacher:

Question	Points	Score
1	4	
2	5	
3	8	
4	9	
5	9	
6	9	
7	9	
8	10	
9	12	
Total:	75	

How I can achieve better:

-
-
-



Last updated: May 5, 2023




1. A circle has the equation $x^2 + y^2 - 6y - 7 = 0$.

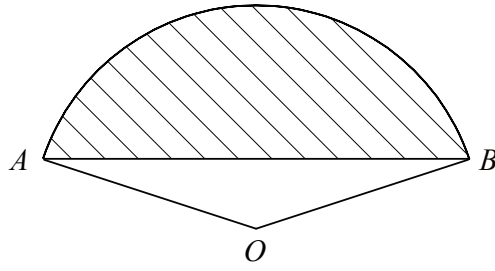
(a) Find the coordinates of the centre of the circle. [2]

(b) Find the radius of the circle. [2]

Total: 4



2. Figure shows the sector OAB of a circle, centre O , in which $\angle AOB = 2.5$ radians.



Given that the perimeter of the sector is 36 cm,


(a) find the length OA ,

[2]

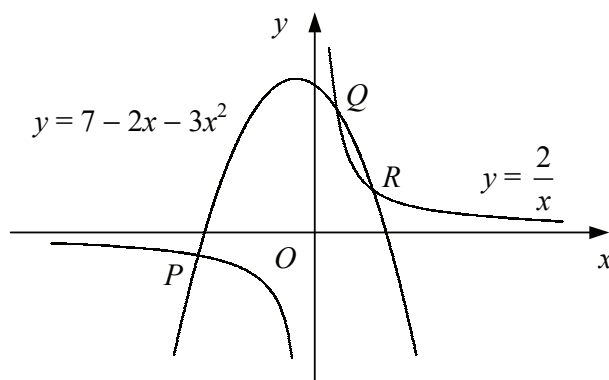
(b) find the area of the shaded segment.

[3]

Total: 5



3. Figure shows the curves with equations $y = 7 - 2x - 3x^2$ and $y = \frac{2}{x}$.




The two curves intersect at the points P, Q and R .

- (a) Show that the x -coordinates of P, Q and R satisfy the equation $3x^3 + 2x^2 - 7x + 2 = 0$. [2]

Given that P has coordinates $(-2, -1)$,


- (b) find the coordinates of Q and R . [6]

Total: 8



4. (a) Expand $(1 + x)^4$ in ascending powers of x . [2]
- (b) Using your expansion, express each of the following in the form $a + b\sqrt{2}$, where a and b are integers. [7]
- i. $(1 + \sqrt{2})^4$
- ii. $(1 - \sqrt{2})^8$

Total: 9




5. (a) Describe fully a single transformation that maps the graph of $y = 3^x$ onto the graph of $y = \left(\frac{1}{3}\right)^x$. [1]
- (b) Sketch on the same diagram the curves $y = \left(\frac{1}{3}\right)^x$ and $y = 2(3^x)$, showing the coordinates of any points where each curve crosses the coordinate axes. [3]

The curves $y = \left(\frac{1}{3}\right)^x$ and $y = 2(3^x)$ intersect at the point P .

- (c) Find the x -coordinate of P to 2 decimal places and show that the y -coordinate of P is $\sqrt{2}$. [5]

Total: 9



6. A curve has the equation

$$y = x^3 + ax^2 - 15x + b,$$

where a and b are constants.

Given that the curve is stationary at the point $(-1, 12)$,


(a) find the values of a and b ,

[6]

(b) find the coordinates of the other stationary point of the curve.

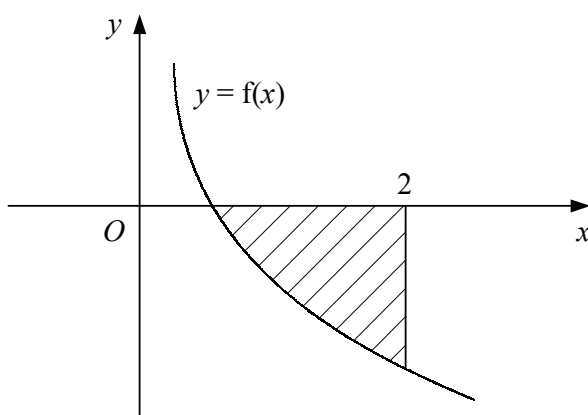
[3]

Total: 9




7. Figure shows part of the curve $y = f(x)$ where


$$f(x) = \frac{1 - 8x^3}{x^2}, \quad x \neq 0.$$



- (a) Solve the equation $f(x) = 0$. [3]
- (b) Find $\int f(x) dx$. [3]
- (c) Find the area of the shaded region bounded by the curve $y = f(x)$, the x -axis and the line $x = 2$. [3]

Total: 9






8. (a) Given that $\sin(\theta) = 2 - \sqrt{2}$, find the value of $\cos^2(\theta)$ in the form $a + b\sqrt{2}$ where a and b are integers. [3]
- (b) Find, in terms of π , all values of x in the interval $0 \leq x < \pi$ for which [7]

$$\cos\left(2x - \frac{\pi}{6}\right) = \frac{1}{2}.$$

Total: 10



9. The second and fifth terms of a geometric series are -48 and 6 respectively.
- (a) Find the first term and the common ratio of the series. [5]
 - (b) Find the sum to infinity of the series. [2]
 - (c) Show that the difference between the sum of the first n terms of the series and its sum to infinity is given by 2^{6-n} . [5]

Total: 12

